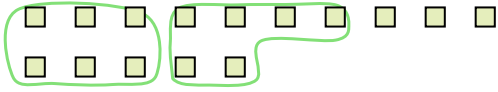




Use the shapes provided to answer the questions.

- Ex) There are 15 shapes below. How many groups of 6 can you make with them? How many will you have left over?



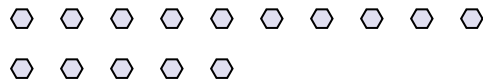
- 1) There are 23 shapes below. How many groups of 8 can you make with them? How many will you have left over?



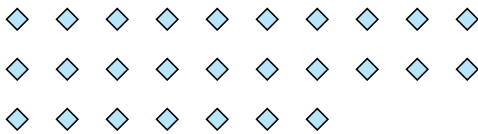
- 2) There are 13 shapes below. How many groups of 8 can you make with them? How many will you have left over?




- 3) There are 15 shapes below. How many groups of 2 can you make with them? How many will you have left over?



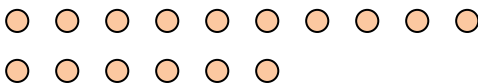
- 4) There are 27 shapes below. How many groups of 9 can you make with them? How many will you have left over?



- 5) There are 12 shapes below. How many groups of 7 can you make with them? How many will you have left over?



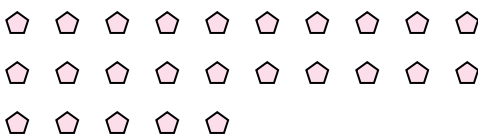
- 6) There are 16 shapes below. How many groups of 7 can you make with them? How many will you have left over?



- 7) There are 20 shapes below. How many groups of 6 can you make with them? How many will you have left over?



- 8) There are 25 shapes below. How many groups of 5 can you make with them? How many will you have left over?



- 9) There are 18 shapes below. How many groups of 2 can you make with them? How many will you have left over?

**Answers**Ex. 2Ex. 3

1. \_\_\_\_\_

1. \_\_\_\_\_

2. \_\_\_\_\_

2. \_\_\_\_\_

3. \_\_\_\_\_

3. \_\_\_\_\_

4. \_\_\_\_\_

4. \_\_\_\_\_

5. \_\_\_\_\_

5. \_\_\_\_\_

6. \_\_\_\_\_

6. \_\_\_\_\_

7. \_\_\_\_\_

7. \_\_\_\_\_

8. \_\_\_\_\_

8. \_\_\_\_\_

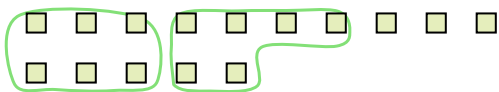
9. \_\_\_\_\_

9. \_\_\_\_\_




Use the shapes provided to answer the questions.

- Ex) There are 15 shapes below. How many groups of 6 can you make with them? How many will you have left over?



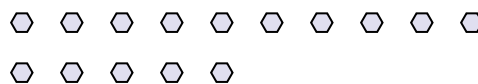
- 1) There are 23 shapes below. How many groups of 8 can you make with them? How many will you have left over?



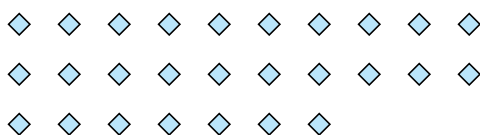
- 2) There are 13 shapes below. How many groups of 8 can you make with them? How many will you have left over?




- 3) There are 15 shapes below. How many groups of 2 can you make with them? How many will you have left over?



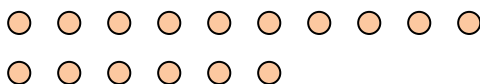
- 4) There are 27 shapes below. How many groups of 9 can you make with them? How many will you have left over?



- 5) There are 12 shapes below. How many groups of 7 can you make with them? How many will you have left over?



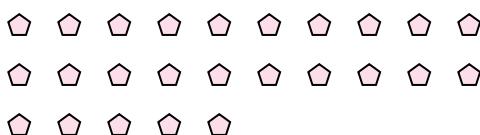
- 6) There are 16 shapes below. How many groups of 7 can you make with them? How many will you have left over?



- 7) There are 20 shapes below. How many groups of 6 can you make with them? How many will you have left over?



- 8) There are 25 shapes below. How many groups of 5 can you make with them? How many will you have left over?



- 9) There are 18 shapes below. How many groups of 2 can you make with them? How many will you have left over?

**Answers**Ex. 2Ex. 31. 21. 72. 12. 53. 73. 14. 34. 05. 15. 56. 26. 27. 37. 28. 58. 09. 99. 0